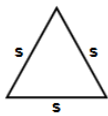


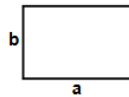


- 1) Find area of triangle
 $s = 392$ ft



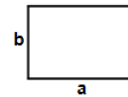
Answer: _____

- 2) Find area of rectangle having sides $a = 984$ cm and $b = 946$ cm




Answer: _____

- 3) Find area of rectangle having sides $a = 791$ cm and $b = 662$ cm



Answer: _____

- 4) Find area of square having each side (s) equals 189 ft



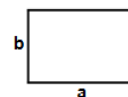
Answer: _____

- 5) Find area of rectangle having sides $a = 680$ m and $b = 295$ m



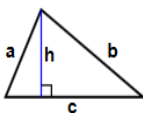
Answer: _____

- 6) Find area of rectangle having sides $a = 597$ m and $b = 304$ m



Answer: _____

- 7) Find area of triangle
 $h = 187$ in, $a = 263$ in,
 $b = 508$ in, $c = 877$ in



Answer: _____

- 8) Find area of square having each side (s) equals 893 in



Answer: _____

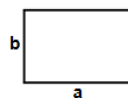
- 9) 05:10 am To 12:20 pm

Answer: _____

- 10) 06:08 am To 12:48 pm

Answer: _____

- 11) Find area of rectangle having sides $a = 723$ m and $b = 123$ m



Answer: _____

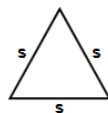
- 12) 06:20 am To 02:01 pm

Answer: _____

- 13) 03:59 am To 10:57 am

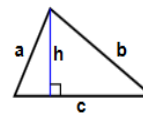
Answer: _____

- 14) Find area of triangle $s = 884$ ft



Answer: _____

- 15) Find area of triangle
 $h = 454$ ft, $a = 629$ ft,
 $b = 992$ ft, $c = 997$ ft



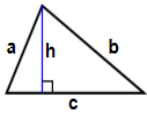
Answer: _____

Name: _____

March 07, 2024



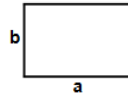
16)



Find area of triangle
 $h = 986$ in, $a = 989$
in,
 $b = 992$ in, $c = 998$
in

Answer: _____

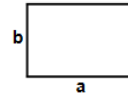
17)



Find area of
rectangle having
sides $a = 550$ ft
and $b = 530$ ft

Answer: _____

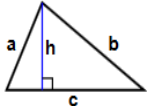
18)



Find area of
rectangle having
sides $a = 975$ ft
and $b = 818$ ft

Answer: _____

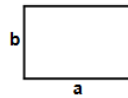
19)



Find area of triangle
 $h = 819$ ft, $a = 906$
ft,
 $b = 924$ ft, $c = 999$ ft

Answer: _____

20)



Find area of
rectangle having
sides $a = 948$ in
and $b = 685$ in

Answer: _____

Total: ____ / 20

Name: _____

Sr: 07032024-3498

March 07, 2024



11-PLUS
SATS
GCSES



Answers:

- | | | | | | | |
|----------------------|---------------------|----------------------|--------------|----------------------|----------------------|-----------------------|
| 1) 66538.463823566ft | 2) 930864cm | 3) 523642cm | 4) 35721ft | 5) 200600m | 6) 181488m | 7) 47498in |
| 8) 797449in | 9) 07 Hours 10 Mins | 10) 06 Hours 40 Mins | 11) 88929m | 12) 07 Hours 41 Mins | 13) 06 Hours 58 Mins | 14) 338380.37396989ft |
| 15) 225184ft | 16) 489056in | 17) 291500ft | 18) 797550ft | 19) 378378ft | 20) 649380in | |